


Name _____ Date _____


Counting Cubes Revisited

DIRECTIONS: The rectangular prisms below are packed with cubes. Determine the total number of cubes in each of the prisms. ***Convince me by including your thinking.***

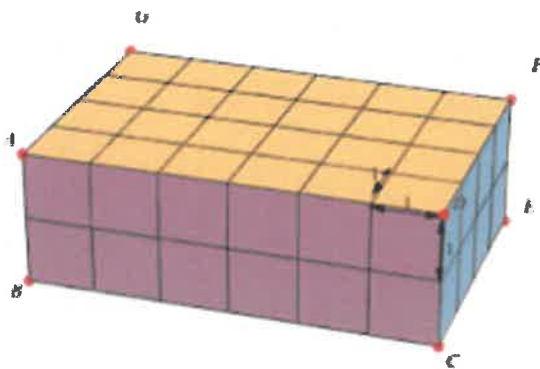
1.)



2.)



3.)



4.)

